

# SOLUTIONS

MARKS IN RED

BPHO 2005 PAPER 2

AND CIRCLED

2) (a) let  $T$  be the original temperature

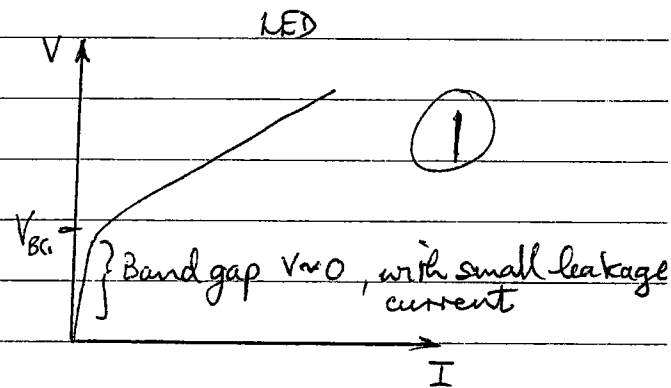
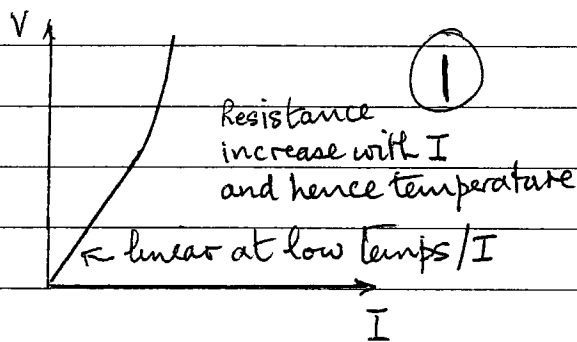
$$\begin{aligned} \text{Heat gained by thermometer} &= \text{Heat lost by water} \quad (1) \\ 20(50-18) &= (T-50) 4200 (0.250) \quad (1) \\ 640 &= (T-50) 1050 \quad (1) \\ T &= 50.0 + \frac{640}{1050} \quad (1) \\ T &= 50.6 \quad (1) \end{aligned}$$

[4]

(b)  $V = (6I - 3I^2 + 2I^3) / 6$   
 $R = \frac{V}{I} = 1 - \frac{1}{2}I + \frac{1}{3}I^2$

(i)  $I = 2$ ,  $R = \frac{4}{3} \Omega$  (1)  
 (ii)  $I = 0$ ,  $R = 1 \Omega$  (1)

(iii) GRAPHS: LIGHT BOMB



(iv) EXPLANATIONS:

Resistance increases with temp, and hence current. linear for small  $I$  / low temps. (1)

little current for  $V < V_{\text{band gap}} (V_{BG})$ , subsequently increases with  $I$ . (1)

[6]

(c)

(1) The charge repels similar charges in the copper sphere and attracts opposite charges causing a net attraction (1)  
 when earthed the like charges in the sphere are repelled to earth, leaving only opposite charges in the sphere. This produces an increased attraction (1)

(ii) On a rough floor friction prevents the base of the ladder from sliding (1)  
 On a smooth floor there is no force preventing the ladder from sliding? (1)  
 this force is necessary to balance the normal reaction from the wall (1)

(iii) If the camera hole is too small there is insufficient light to produce a contrasted image (if exceedingly small diffraction effects present) If the hole is too large it no longer acts as a 'point' hole and produces blurring due to overlapping images from the finite hole. (1)

(iv) The blue cloth only reflects blue light. Sodium light is yellow so no light is reflected - so cloth appears dark. (1)  
 [7]

(d) (i) Light is a transverse wave and sound is a longitudinal wave. Only transverse waves can be polarized. (1)  
 Rotate a polaroid sheet in the beam. The intensity will vary from a maximum to a minimum for a partially polarized beam. A fully polarized beam causes extinction at the minimum. (1)

(ii)	$[A] = [y] = [L]$	units: m	$\left. \begin{matrix} \frac{1}{2} \\ \frac{1}{2} \\ \frac{1}{2} \\ \frac{1}{2} \end{matrix} \right\} 2$
	$[\pi] = [0]$	units: dimensionless	
	$[\beta] = [T^{-1}]$	units: $s^{-1}$	
	$[\gamma] = [L]$	units: m	

y will maintain the same value providing  
 $2\pi(\beta t - x/\gamma) = \text{const}$   
 $x = -\frac{\text{const}}{2\pi} + \gamma\beta t$   
 Velocity  $u = \gamma\beta$ , which is a constant (1) either  $u = \frac{dx}{dt} = \beta\gamma$  or  $\frac{\Delta x}{\Delta t} = \gamma\beta$  (1) 3  
 Non mathematical explanation OK if correct (1)  
 [7]

(e) (i) Wind dries water vapour from the clothes. This causes more water to evaporate, which cools the remaining water in the clothes. Sufficient cooling will extract sufficient latent heat of fusion from the water to cause freezing of the water (2)

e) (ii) If mass  $M$  freezes and mass  $m$  evaporates then heat extracted from  $M = 333 \times 10^3 M$  J (1/2)  
 energy extracted from water =  $2500 \times 10^3 m$  J (1/2)

Equating

$$333 M = 2500 m \quad (1)$$

$$\frac{M}{m} = \frac{2500}{333}$$

$$\frac{M}{m+M} = \frac{2500}{2500+333} = \frac{2500}{2833} = 0.882 \quad (1)$$

[5]

f) (i)  $v^2 = u^2 + 2as$

$$(310)^2 = 2a(1.20)$$

$$a = 4.00 \times 10^4 \text{ ms}^{-2} \quad (1)$$

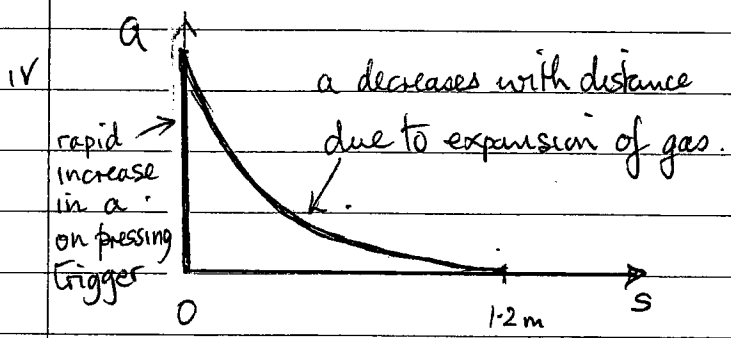
(ii)  $v = u + at$

$$310 = 4.00 \times 10^4 t$$

$$t = 7.74 \times 10^{-3} \text{ s} \quad (1)$$

$$\begin{aligned} \text{Rotational speed} &= 2(2\pi) / 7.74 \times 10^{-3} \text{ rads/s} \\ &= 1.62 \times 10^3 \text{ rads/s} \quad (1) \end{aligned}$$

(iii) Rotation produces stability in the motion of the bullet (1)



[5]

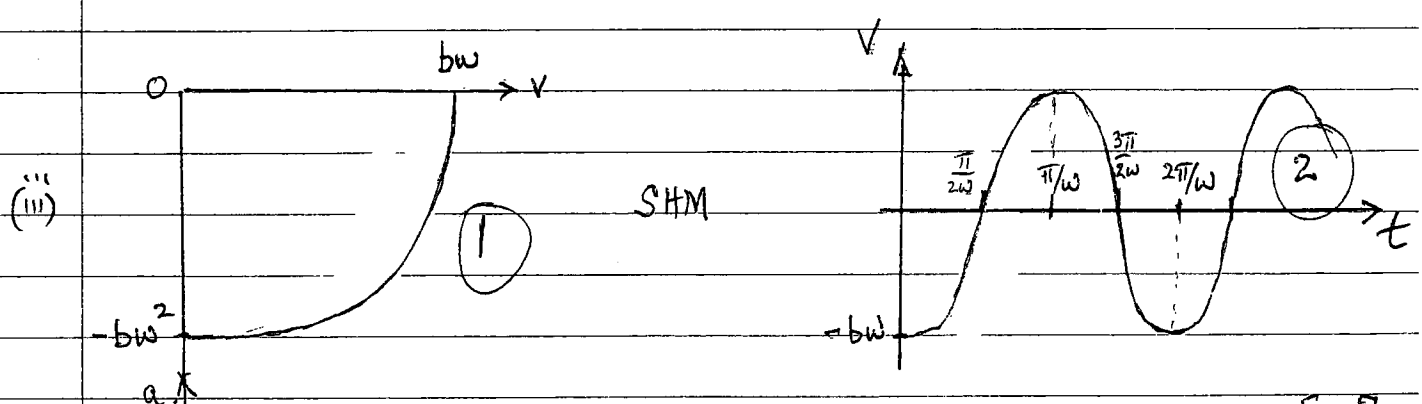


g) (i) Upthrust = Vol.  $(\rho_{\text{air}} - \rho_{\text{He}})g$  (1)  
 $= 512 (1.290 - 0.178)g$   
 $= 569g$   
 $= mg$  where  $m$  is largest mass raised

$$m = 569 \text{ kg} \quad (1)$$

1) (ii) Relative to surrounding air mass, air in balloon has a 'negative' air mass =  $V(\rho_{He} - \rho_{air})$ , where  $V$  is the volume of the balloon. This causes an upthrust when in equilibrium and will behave like a negative mass when applying the equation of motion when in motion.

Inertia of air is greater than inertia of He. Therefore air continues forward more than He. When the bus decelerates the passengers will be thrown forward if not restrained, for example, by a seat belt; they have a positive mass. The balloon will be displaced backward with its string at an angle. When the bus comes to rest the string will return to its vertical position.

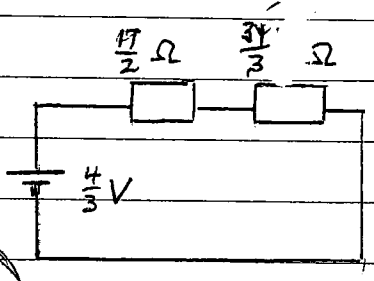
2) (1) a against v (2) v against t [5]



j) (i)  $10.0 \Omega$  in parallel with  $4.00 \Omega$ ; total resistance  $(\frac{1}{10} + \frac{1}{4})^{-1}$  (1)  
 Total resistance =  $(\frac{1}{10} + \frac{1}{4})^{-1} + 2 = \frac{34}{7} \Omega$  (1)  
 Current through  $2.00 \Omega = 2 \times (\frac{34}{7})$   
 $\therefore I_0 = \frac{2}{17} = 0.118$  amps (1) ✓

(ii)  $V_{AB} = 2.00 (\frac{4}{6}) = \frac{4}{3} = 1.333$  volts (1)

(iii)  $\frac{V_{AB}}{I_0} = \frac{4}{3} (\frac{17}{7}) = \Omega$  (1)  
 $I = \frac{4}{3} / (\frac{17}{2} + \frac{34}{3}) = \frac{4}{3} (\frac{6}{119}) = \frac{8}{119} = 67.2 \mu A$  (1) =  $67.02 \mu A$   
 [6]



k) Escape velocity for planet Mars, mass  $M$  and radius  $R$ , is  $V_{ME}$   
 For body mass  $m$  escaping

$$\frac{1}{2} m v_{ME}^2 = \frac{GMm}{R}$$

$$v_{ME} = \sqrt{\frac{2GM}{R}} \quad (1)$$

On Earth escape velocity

$$v_E = \sqrt{\frac{2GM_E}{R_E}} \quad (1)$$

Ratio

$$\frac{v_{ME}}{v_E} = \sqrt{\frac{M}{M_E} \frac{R_E}{R}} = \sqrt{(0.1074)/(0.5326)}$$

$$v_{ME} = 0.4491 v_E \quad (1)$$

[3]

l) Let velocities of the  $m$  masses be  $v$  at  $30^\circ$  to incident velocity  $u$ .

Conservation of momentum:

$$Mu = 2mv \cos 30^\circ = 2mv \frac{\sqrt{3}}{2} = \sqrt{3}mv \quad (1)$$

Conservation of energy:

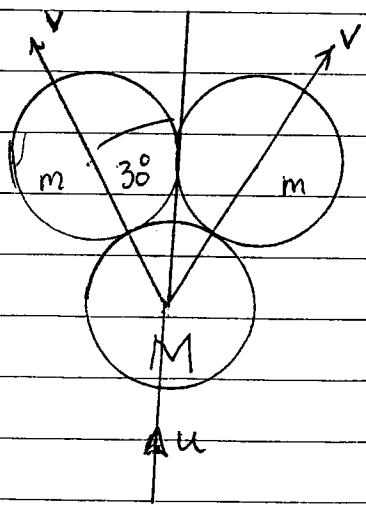
$$\frac{1}{2} Mu^2 = 2 \cdot (\frac{1}{2} mv^2)$$

$$Mu^2 = 2mv^2 \quad (2)$$

Substituting from ① for  $v$  into ②

$$Mu^2 = 2m \left( \frac{Mu}{m\sqrt{3}} \right)^2$$

$$M = \frac{3}{2} m \quad (1)$$



[4]

n) let current in  $R_1$  be  $I_1$  and that in  $R_2$   $I_2$ , the forces will be pointing out of the plane of the diagram and perpendicular to it. ①

The resultant torque  $\tau =$  moment of the forces  
 $\tau = \frac{1}{2}d [BI_2L - BI_1L]$   
 $= \frac{1}{2}Bld [I_2 - I_1]$  ① anticlockwise around I

For the circuit of parallel resistors as viewed from above  
 $I_1 = \frac{R_2}{R_1+R_2} I$  &  $I_2 = \frac{R_1}{R_1+R_2} I$  ①

Substituting in ①

$\tau = \frac{(R_1 - R_2)Bld I}{2(R_1 + R_2)}$  ① Anticlockwise around I as viewed from above

[6]

(i) Applying Newton's gravitational law of attraction to mass  $m$  at  $h$

$$mg_h = \frac{GM_E m}{(R_E + h)^2} \quad (1)$$

$$g_h = \frac{GM_E}{(R_E + h)^2}$$

But  $g_0 = \frac{GM_E}{R_E^2}$

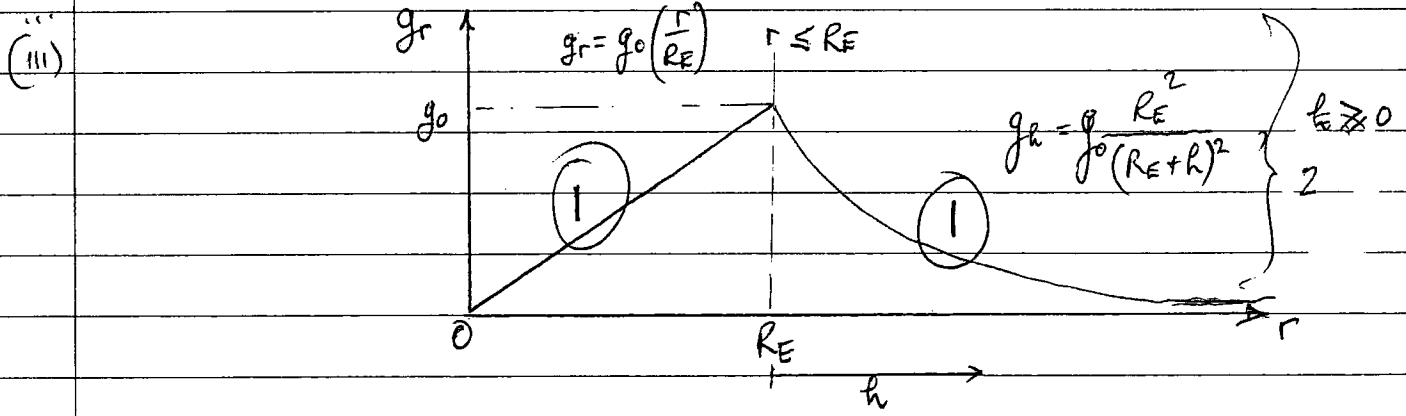
Thus  $g_h = g_0 \frac{R_E^2}{(R_E + h)^2} \quad (1)$

(ii) Below the Earth's surface force on mass  $m$  due to sphere radius  $r$ ,  $M_r$ ,  
Thus

$$mg_r = \frac{GM_r m}{r^2} \quad (1)$$

But  $M_r = \left(\frac{r}{R_E}\right)^3 M_E \quad (1)$

So  $g_r = \frac{GM_E r}{R_E^3} = g_0 \left(\frac{r}{R_E}\right) \quad (1)$



(iv) The Earth does not have uniform density, but it is spherically symmetric, with increasing density towards its centre, consequently the equations in (i) and (ii) do apply, providing in (ii) the  $M_r$  is the mass within the sphere of radius  $r$  and the subsequent equations are modified to take this into account

2(b) (i) For a satellite in circular motion, mass  $m$ , angular frequency  $\omega$ ,

$$m(R_E + h)\omega^2 = \frac{GMEm}{(R_E + h)^2} \quad (1)$$

where

$$\omega = \frac{2\pi}{(2.0 \times 60 \times 60)}$$

$$(R_E + h)^3 = \frac{GM_E}{\omega^2}$$

$$= \frac{(6.67 \times 10^{-11})(5.97 \times 10^{24})}{\left(\frac{2\pi}{2.0 \times 60 \times 60}\right)^2} \quad (1)$$

$$= (6.67)(5.97)10^{13} \left(\frac{7.20 \times 10^3}{2\pi}\right)^2$$

$$= 5.229 \times 10^{20} \text{ m}^3 \quad (1)$$

$$R_E + h = 8.056 \times 10^6 \text{ m}$$

$$h = (8.056 - 6.38)10^6 \text{ m}$$

$$h = 1.68 \times 10^6 \text{ m} = 1.68 \times 10^3 \text{ km} \quad (1)$$

(ii) Angular velocity of the Earth =  $\frac{2\pi}{(24 \times 60 \times 60)}$  rads/s  $\left(\frac{1}{2}\right)$

Angular velocity of satellite =  $\frac{2\pi}{(2 \times 60 \times 60)}$  rads/s  $\left(\frac{1}{2}\right)$

Angular velocity of satellite relative to the Earth =  $\frac{2\pi}{60 \times 60 \times 2} \left[1 - \frac{1}{12}\right]$   $\left(\frac{1}{2}\right)$

$$= \frac{2\pi(11)}{(12 \times 60 \times 60)}$$

$$= 8.000 \times 10^{-4} \text{ s}^{-1} \quad (1)$$

(iii) In the diagram

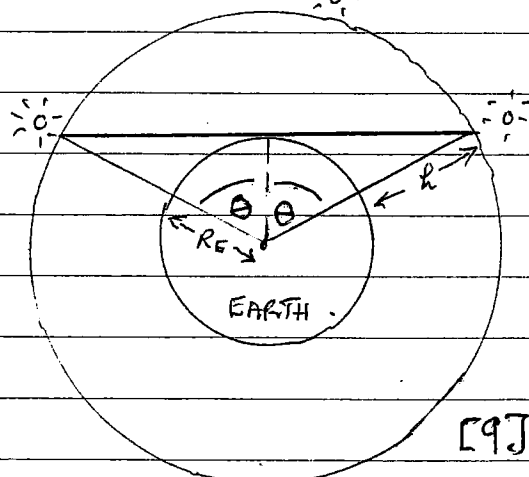
$$\cos \theta = \frac{R_E}{R_E + h} \quad (1)$$

$$= \frac{6.38 \times 10^6}{8.056 \times 10^6}$$

$$= 0.792 \quad (1)$$

$$\theta = 37.63^\circ$$

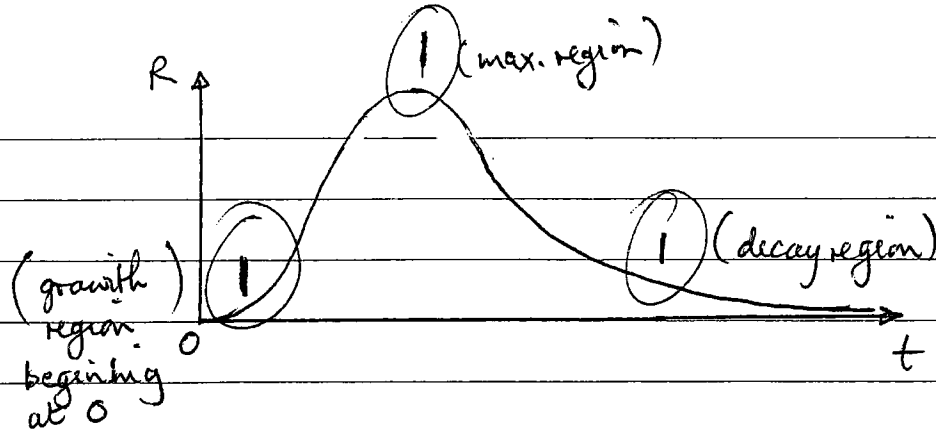
$$\therefore 2\theta = 75.3^\circ \quad (1)$$



(c)

The gravitational field of the Moon, and to a lesser extent the Sun, will perturb the circular motion and limit the largest periods. Viscous effects of the Earth's atmosphere will reduce the energy of the satellite and limit the smallest possible periods of a satellite





[3]

2) (i)  $R = \frac{\lambda_1}{(\lambda_2 - \lambda_1)} [e^{-\lambda_1 t} - e^{-\lambda_2 t}]$

For small t

$$e^{-\lambda t} = 1 - \lambda t + \dots$$

Giving

$$R = \frac{\lambda_1}{(\lambda_2 - \lambda_1)} [(1 - \lambda_1 t + \dots) - (1 - \lambda_2 t + \dots)]$$

$$= \frac{\lambda_1}{(\lambda_2 - \lambda_1)} [(\lambda_2 - \lambda_1)t + \dots]$$

$R = \lambda_1 t + \dots$  (1) (accept proof if  $\lambda_1$  neglected with respect to  $\lambda_2$ )

(ii) For larger and  $\lambda_2 > \lambda_1$ , the second exponential term can be neglected, then (1)

$R = \frac{\lambda_1}{(\lambda_2 - \lambda_1)} e^{-\lambda_1 t}$  (1) (accept  $\frac{\lambda_1}{\lambda_2} e^{-\lambda_1 t}$ , where  $\lambda_1$  neglected in denominator)

2) (i)  $R = \lambda_1 t$

Plot R against (1) for small t, in the region where  $e^{-\lambda t} \approx 1 - \lambda t$ . This will be a straight line gradient  $\lambda_1$ . Hence  $\lambda_1$  determined by measuring the gradient (1)

(ii)  $R = \frac{\lambda_1}{(\lambda_2 - \lambda_1)} e^{-\lambda_1 t}$  (I)

Thus

$$\ln R = \ln (\lambda_1 / (\lambda_2 - \lambda_1)) - \lambda_1 t$$
 (1)

Plot  $\ln R$  against t for values of t where  $e^{-\lambda_2 t} \ll e^{-\lambda_1 t}$ . This is a straight line gradient  $(-\lambda_1)$ , which has previously been determined, and intercept  $\ln [\lambda_1 / (\lambda_2 - \lambda_1)]$ . Knowing  $\lambda_1$ ,  $\lambda_2$  can be determined from this intercept (1)

ACCEPT SOLU. WHERE  $\lambda_1$  NEGLECTED IN DENOMINATOR OF (I)

eg if intercept  $k = \ln[\lambda_1 / (\lambda_2 - \lambda_1)]$  (1)

$$\frac{\lambda_1}{(\lambda_2 - \lambda_1)} = e^k$$

$$\lambda_2 = \lambda_1 e^{-k} + \lambda_1 = \lambda_1 (1 + e^{-k})$$
 (1) [6]

d)  $R = \frac{N_2}{N_0}$  so

$$\frac{N_2}{N_0} = \frac{\lambda_1}{(\lambda_2 - \lambda_1)} [e^{-\lambda_1 t} - e^{-\lambda_2 t}]$$
 (1)

Also

$$N_1 = N_0 e^{-\lambda_1 t}$$
 (1)

For  $\lambda_2 \gg \lambda_1$  and  $e^{-\lambda_1 t} \gg e^{-\lambda_2 t}$  (suitable long times)

$$\frac{N_2}{N_1} = \frac{\lambda_1}{(\lambda_2 - \lambda_1)}$$

$$\approx \frac{\lambda_1}{\lambda_2}$$
 (1) as  $\lambda_2 \gg \lambda_1$

so  $N_2 \lambda_2 = N_1 \lambda_1$


conditions for validity:

$$\lambda_2 \gg \lambda_1$$

$$e^{-\lambda_1 t} \gg e^{-\lambda_2 t}$$
 (1) (1)

[5]

(e)



$$N_3 = N_0 - N_1 - N_2$$

[2]

a) (i) Force on particle is perpendicular to its displacement hence work done is zero. Work done in one revolution is zero. (1)

(ii) Force acting on particle  $\frac{mv^2}{r}$  towards centre of circle radius  $r$ . The direction only varies uniformly with time. (1)

[4]

b) (i)  $v_{xy}^2 = u^2 + v^2$

$v_{xy} = \sqrt{u^2 + v^2}$  (1)

(ii)  $z = \omega t$  (1)

(iii)  $\frac{mv_{xy}^2}{r} = BQ v_{xy}$  (1)

$r = mv_{xy} / BQ$  (I)

$r = \frac{m \sqrt{u^2 + v^2}}{BQ}$  (II) (1)

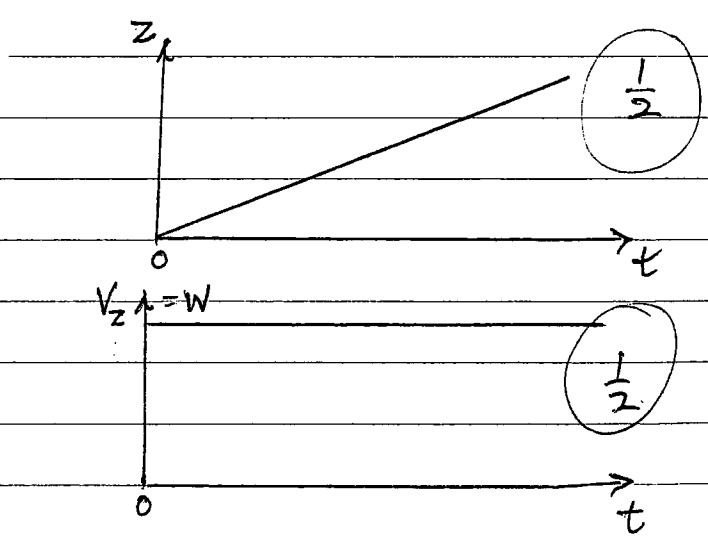
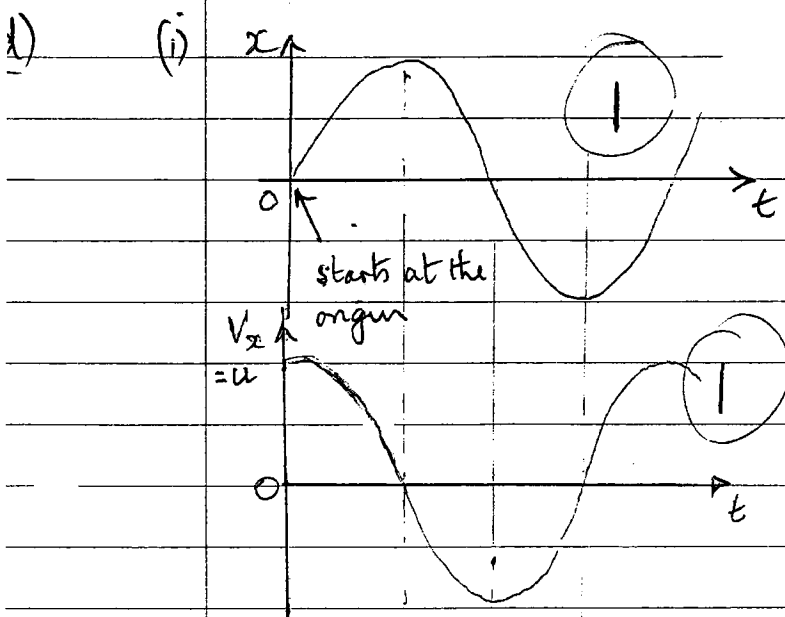
[5]

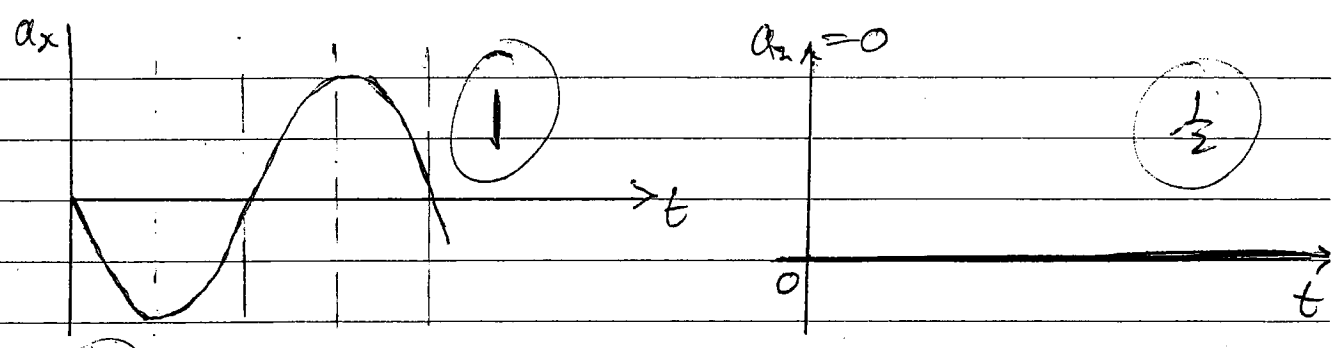
c) (i)  $T = \frac{2\pi}{\omega} = \frac{2\pi r}{v_{xy}}$  (1)

$\therefore T = \frac{2\pi m}{BQ}$  (1) from (I) (III)

(ii) If B increases, from (II), r decreases and, from (III), T decreases. (1)

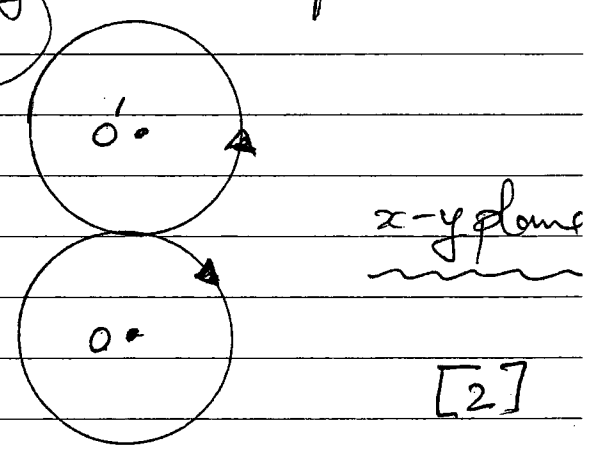
[4]





$\frac{1}{2}$  mark for initial correct displacements  $x=0$  &  $z=0$ . [5]

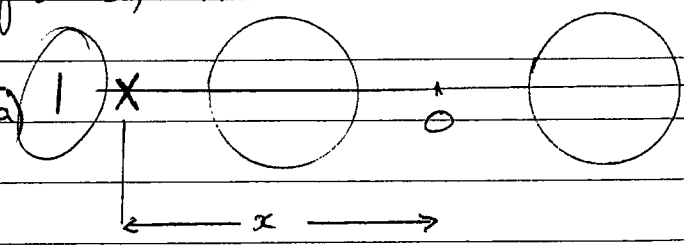
e) From II reversing B will change the centre of rotation in the  $x$ - $y$  plane from  $O$  to  $O'$  in the diagram. The motion along the  $z$ -direction will be unchanged. 1



[2]

(i) Electrostatic potential at O =  $-\frac{Q}{(4\pi\epsilon_0)3a} - \frac{Q}{(4\pi\epsilon_0)3a} = \underline{\underline{-\frac{2Q}{(4\pi\epsilon_0)3a}}$  (1)

(ii) let the point/s be at distance  $x$  from O, at X

Then 
$$-\frac{2Q}{(4\pi\epsilon_0)3a} = \frac{-Q}{4\pi\epsilon_0(x-3a)} + \frac{-Q}{4\pi\epsilon_0(x+3a)}$$


$$= \frac{-2xQ}{4\pi\epsilon_0(x^2 - 9a^2)}$$

Hence

$$x^2 - 9a^2 = 3xa$$

$$x^2 - 3xa - 9a^2 = 0$$


$$x = \frac{1}{2} [3a \pm \sqrt{9a^2 + 4 \cdot 9a^2}] = \frac{3a}{2} [1 \pm \sqrt{5}]$$

Negative value corresponds to point inside sphere where equation is not valid. There are thus two points at distance from O of  $x = \frac{3a}{2} [1 + \sqrt{5}]$  to left and right of O!

(iii)

(2) for diagram

$V = -\frac{2Q}{(4\pi\epsilon_0)3a} \times$

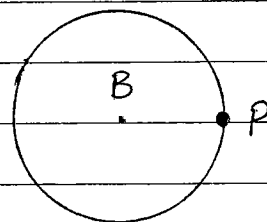


[7]

(i) Point P has highest potential (1)

$$V_H = -\frac{Q}{(4\pi\epsilon_0)7a} - \frac{Q}{(4\pi\epsilon_0)a}$$

$$V_H = -\frac{8Q}{(4\pi\epsilon_0)7a}$$



(ii) To reach A the positive charge must pass through the potential barrier given in (iii). This is the lowest potential barrier;  $V = -\frac{2Q}{(4\pi\epsilon_0)3a}$  (1)

(iii) Minimum speed  $v$  required by a charge  $q$  at P to overcome the barrier  $V_L$  is given by the conservation of energy equation! (1)

$$\frac{1}{2}mv^2 - \frac{8Qq}{(4\pi\epsilon_0)7a} = -\frac{2Qq}{(4\pi\epsilon_0)3a}$$

$$v = \sqrt{\frac{20}{21} \frac{Qq}{(4\pi\epsilon_0)m}}$$

[8]

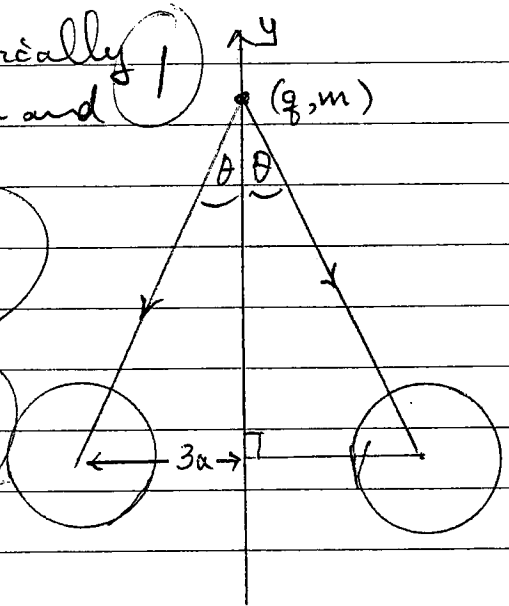
c)

Resultant force,  $F$ , is by symmetry vertically downwards. Using notation in diagram and resolving vertically

$$F = \frac{2Qq}{(4\pi\epsilon_0)(y^2+9a^2)} \cos\theta \quad (2)$$

$$= \frac{2Qq}{(4\pi\epsilon_0)(y^2+9a^2)} \frac{y}{\sqrt{y^2+9a^2}} \quad (1)$$

$$F = \frac{2Qq y}{(4\pi\epsilon_0)(y^2+9a^2)^{3/2}} \quad (1)$$



[5]

26

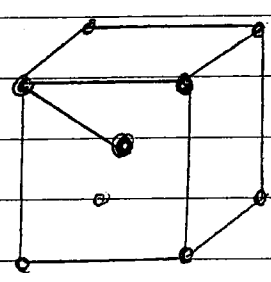
- (i) 1
- (ii) 2
- (iii) 4

- (1)
- (1)
- (2)

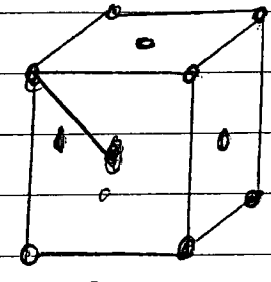
no proof. [4]

$D = a$

- (i)  $D = \sqrt{(\frac{1}{2}a)^2 + (\frac{1}{2}a)^2 + (\frac{1}{2}a)^2} = a \frac{\sqrt{3}}{2}$  (1/2)  $N=6$  (1/2)
- (ii)  $D = \sqrt{(\frac{1}{2}a)^2 + (\frac{1}{2}a)^2} = a \frac{\sqrt{2}}{2}$  (2) (1)  $N=8$  (1)
- (iii)  $D = \sqrt{(\frac{1}{2}a)^2 + (\frac{1}{2}a)^2} = a \frac{\sqrt{2}}{2}$  (2) (1)  $N=12$  (2)



BCC

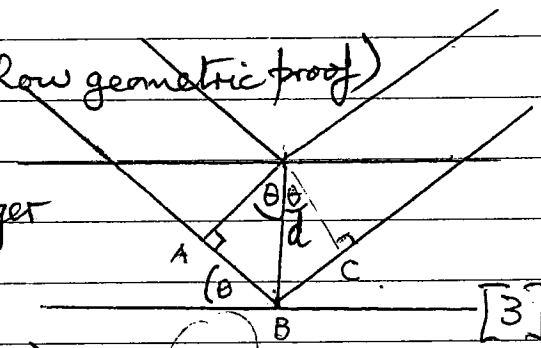


FCC

[8]

(i) Path difference (ABC) =  $2d \sin \theta$  (2) (must show geometric proof)

(ii)  $2d \sin \theta = n\lambda$  (1) where  $n$  integer



[3]

(i)  $2d \sin \theta_0 = \lambda$  (case  $n=1$ ) (1)

Now  $d = a = 5.0 \times 10^{-10} \text{ m}$

Substituting  $\lambda = 1.24 \times 10^{-10} \text{ m}$  into formula for  $\theta_0$

$$\sin \theta_0 = \frac{1.24 \times 10^{-10}}{10^{-9}} = 0.124$$

$$\theta_0 = 7.1^\circ \quad (1)$$

(ii) Highest order of diffraction occurs when  $\frac{n\lambda}{2d}$  just less than max. value of  $\sin \theta$ , which is 1 (1)

As  $(\frac{\lambda}{2d}) = 0.124$  this occurs when  $n=8$ , giving  $\frac{8\lambda}{2d} = 0.992$

This occurs for

$$\sin \theta_H = 0.992$$

$$\theta_H = 82.7^\circ \quad (1)$$

[5]

Q7

a) (i) Rest energy is the energy when  $p=0$

$$E_{rest} = m_e c^2$$

(ii) The kinetic energy  $T$  is  $E - E_{rest}$  thus

$$T = \sqrt{p^2 c^2 + m_e^2 c^4} - m_e c^2$$

[4]

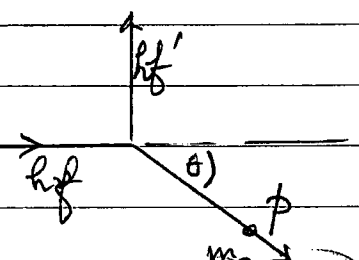
b) (i) conservation equations

Horizontal momentum:

$$p \cos \theta = \frac{hf}{c}$$

Vertical momentum:

$$p \sin \theta = \frac{hf'}{c}$$



Energy equation:

$$hf + m_e c^2 = \sqrt{p^2 c^2 + m_e^2 c^4} + hf'$$

(ii) Squaring and adding (I) and II, using  $\sin^2 \theta + \cos^2 \theta = 1$ ,

$$p^2 = \left(\frac{h}{c}\right)^2 (f^2 + f'^2)$$

$$c^2 p^2 = h^2 (f^2 + f'^2)$$

From III

$$h(f - f') + m_e c^2 = \sqrt{p^2 c^2 + m_e^2 c^4}$$

Squaring,

$$[h(f - f') + m_e c^2]^2 = p^2 c^2 + m_e^2 c^4$$

From (IV)

$$= h^2 (f^2 + f'^2) + m_e^2 c^4$$

Expanding LHS, cancelling,

$$h^2 (f^2 + f'^2 + 2ff') + m_e^2 c^4 + 2m_e c^2 h(f - f') = h^2 (f^2 + f'^2) + m_e^2 c^4$$

$$-2ff'h^2 + 2m_e c^2 h(f - f') = 0$$

$$-f'(fh + m_e c^2) + m_e c^2 f = 0$$

$$f' = \left(\frac{hf + m_e c^2}{m_e c^2}\right)^{-1} f$$

$$f' = \left(1 + \frac{hf}{m_e c^2}\right)^{-1} f$$

[13]



When  $hf \ll mc^2$  equation (I) gives

$$f = f' \quad (1)$$

From equations (I) and (II)

$$\tan \theta = \frac{\sin \theta}{\cos \theta} = \frac{f'}{f} = 1 \quad (1) \quad (\text{as } f = f' \text{ above})$$

$$\therefore \theta = 45^\circ$$

Equation (IV) gives

$$\phi = \sqrt{2} \frac{hf}{c} \quad (1) \quad \text{as } f = f'$$

[3]

(i) Diameter of Venus shadow  $4.0 \text{ mm} \pm 0.5 \text{ mm}$

Diameter of Sun  $140 \text{ mm} \pm 15 \text{ mm}$  (NOTE: PICTURE DOES NOT SHOW A QUARTER OF SUN AREA)

$$\lambda = \left(\frac{140}{4}\right)^2 = 1225 \quad | \quad (\text{ACCEPT } 700 \rightarrow 1600)$$

[ ERROR CALCULATION, NOT REQUIRED BY STUDENT, GIVES ]

$$\frac{\Delta\lambda}{\lambda} = 2 \left( \frac{0.5}{4.0} + \frac{15}{140} \right) \sim 45\%$$

$\lambda = 1225 \pm 500$  | Accept error in range  $\pm 500$  to  $\pm 250$   
 No marks for smaller or larger error

See diagram

(ii) Similar triangles and data from Table 8.1. give

$$\frac{x}{12.1 \times 10^6} = \frac{1.50 \times 10''}{(1.50 - 1.08) \times 10''} = \frac{1.50}{0.42}$$

$$x = 12.1 \times 10^6 \left( \frac{1.50}{0.42} \right)$$

Radius of shadow =  $6.05 \times 10^6$   $\left( \frac{1.50}{0.42} \right)$

Giving

$$\lambda = \left( \frac{6.98 \times 10^8}{6.05 \times 10^6} \right)^2 \left( \frac{0.42}{1.50} \right)^2 \quad |$$

$$\lambda = 1042 \quad |$$

[ Error Calculation, not required by student, gives ]

$$\frac{\Delta\lambda}{\lambda} = 2 \left[ \frac{10}{6980} + \frac{10}{605} + \frac{1}{42} + \frac{1}{150} \right] \sim 0.05$$

$\lambda = 1042 \pm 52$  (ACCEPT ANY ERROR IN RANGE)  
 | FOR ERROR 25  $\rightarrow$  100, NO MARKS OTHERWISE

[6]

b) (i) Relative angular velocity  $\omega = \omega_V - \omega_E$  | (E = EARTH, V = VENUS)

$$= 2\pi \left( \frac{1}{T_V} - \frac{1}{T_E} \right) \quad \text{Periods } T$$

$$= 2\pi \left( \frac{T_E - T_V}{T_E T_V} \right) \quad |$$

Sub<sup>g</sup>.  $T_V = 1.94 \times 10^5$ ,  $T_E = 3.16 \times 10^5$

Relative period  $T = \frac{2\pi}{\omega} = \frac{T_E T_V}{T_E - T_V} = 5.02 \times 10^5 \text{ s} = 1.59 \text{ years}$  |

Comment: It is in fact much longer ( $\sim 100$  years) due to  $\left(\frac{1}{2}\right)$  perturbations produced by other bodies in solar system

(ii) Angular diameter of Sun at Earth

$$\theta = \frac{2 \times 6.96 \times 10^8}{1.50 \times 10^{11}} = 9.28 \times 10^{-3} \text{ rads.}$$

Time of transit (see diagram) =  $\frac{\text{Dist. travelled by Venus}}{\text{Orbital Circumference}} \times T$

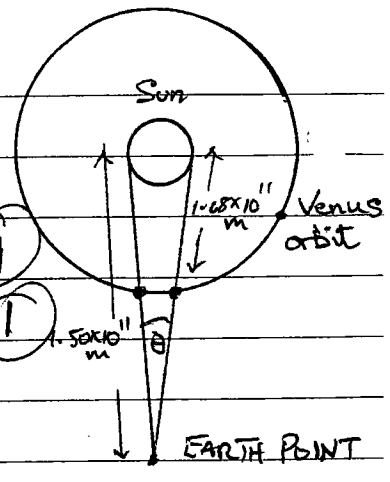
$$= \frac{(1.50 - 1.08) 10^{11} \theta}{2\pi (1.08) 10^{11}} (5.02 \times 10^7)$$

As  $\theta = 9.28 \times 10^{-3}$

$$= \frac{\theta}{2\pi} \left( \frac{0.42}{1.08} \right) 5.02 \times 10^7$$

$$= \frac{9.28 \times 10^{-3}}{2\pi} \left( \frac{0.42}{1.08} \right) 5.02 \times 10^7$$

$$= 8.0 \text{ hours}$$



[7]

(i) Angle between telescopes to observe shadows of Venus crossing Sun

$$\phi \approx \frac{\text{Diameter of Earth}}{\text{Dist. of Earth from Sun}}$$

$$= \frac{2 \times 6.378 \times 10^6}{1.50 \times 10^{11}} \text{ rads.} = 8.51 \times 10^{-5} \text{ rads.}$$

$$= 4.87 \times 10^{-3} \text{ degrees}$$

FITTER RESULT OK

(ii) So that clocks could be synchronized

(iii) In 18th century there was no universal time; different places had different times. Thus (c)(ii) was a way of synchronizing clocks at two observatories.

d) If during the interval between transits Venus has a velocity  $v_s$  perpendicular to its orbit, and as a result is displaced by  $\frac{1}{2} (9.28 \times 10^{-3})$  rads. as observed from Earth (half ang. diam. of Sun at Earth), Venus will not pass in front of the Sun.

$$4.64 \times 10^{-3} \text{ rads. in } 5.02 \times 10^7 \text{ s}$$

i.e.  $(4.64 \times 10^{-3}) (0.42 \times 10^{11}) \text{ m in } 5.02 \times 10^7 \text{ s.}$

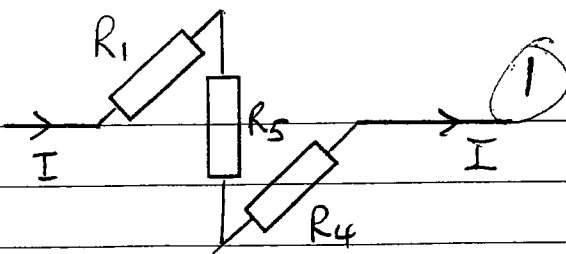
The speed

$$v_s = \left( \frac{4.64 \times 10^{-3} \times 0.42 \times 10^{11}}{5.02 \times 10^7} \right) \text{ ms}^{-1}$$

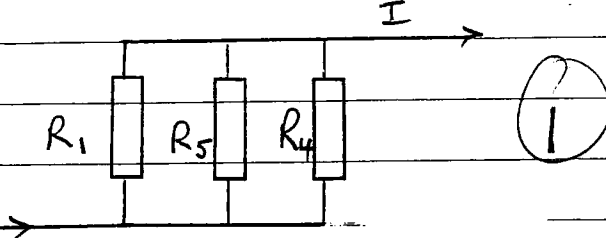
$$= 3.9 \text{ ms}^{-1}$$

[4] [3]

(i)  $R_2 = R_3 = \infty$  (1)



(ii)  $R_2 = R_3 = 0$  (1)

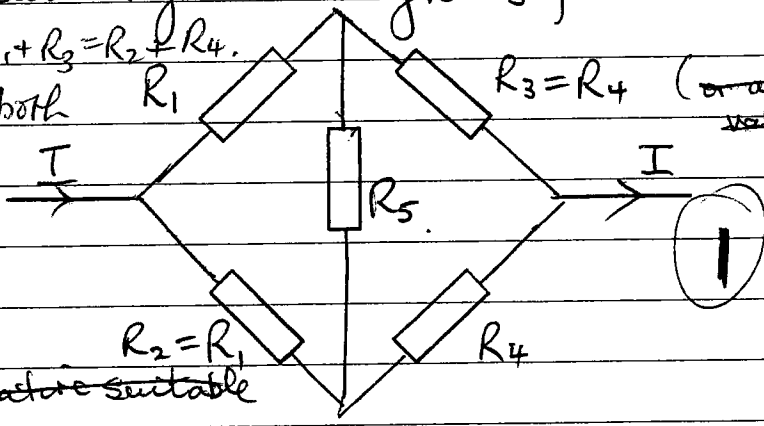


(iii) A balanced Wheatstone bridge,  $R_1 R_4 = R_2 R_3$ , will produce a circuit with  $(R_2 + R_3)$  in parallel with  $(R_1 + R_4)$ . A simple pair of values for  $R_2$  and  $R_3$  is  $R_2 = R_1$  and  $R_3 = R_4$ . Any other suitable set satisfying  $R_1 R_4 = R_2 R_3$  is acceptable. Note: no current flows through  $R_5$  for balanced bridge.

In addition we require  $R_1 + R_3 = R_2 + R_4$ .

The only solution satisfying both conditions is

$R_2 = R_1$  &  $R_3 = R_4$ .



(or alternative suitable value)

[8]

b (i)  $R = R_1 + R_5 + R_4$  (1)

(ii)  $R = \left( \frac{1}{R_1} + \frac{1}{R_5} + \frac{1}{R_4} \right)^{-1}$  (1)

(iii)  $R = \left( \frac{1}{R_1 + R_4} + \frac{1}{R_1 + R_4} \right)^{-1} = \frac{1}{2} (R_1 + R_4)$  } or any acceptable alternative for  $R_2$  &  $R_3$  (1)

2 (i)  $P_5 = I^2 R_5$  (1)

(ii)  $P_5 = I^2 \left( \frac{1}{R_1} + \frac{1}{R_5} + \frac{1}{R_4} \right)^{-2} \frac{1}{R_5}$  (1) i.e.  $\frac{V^2}{R_5}$

(iii)  $P_5 = 0$  (1) no current through  $R_5$ .

[6]

(i) By symmetry, the circuit is identical to that obtained by reflecting about the diagonal AC. Thus  $V_B = V_D$ ; potentials at B and D identical 2

(ii) There are several different methods of solution.

Solution 1

Reversing the currents produces an identical circuit. However currents in OD and OB have changed direction. Since both circuits are identical, these currents must be zero; thus O at same potential as B and D. Thus currents, by symmetry, in AOC, AOB and ABC must be equal each being  $\frac{1}{3}I$ .

Total resistance of 3 parallel resistors, resistance  $r+r=2r$ ,

$$R = \left(\frac{1}{2r} + \frac{1}{2r} + \frac{1}{2r}\right)^{-1}$$

$$R = \frac{2r}{3}$$

4

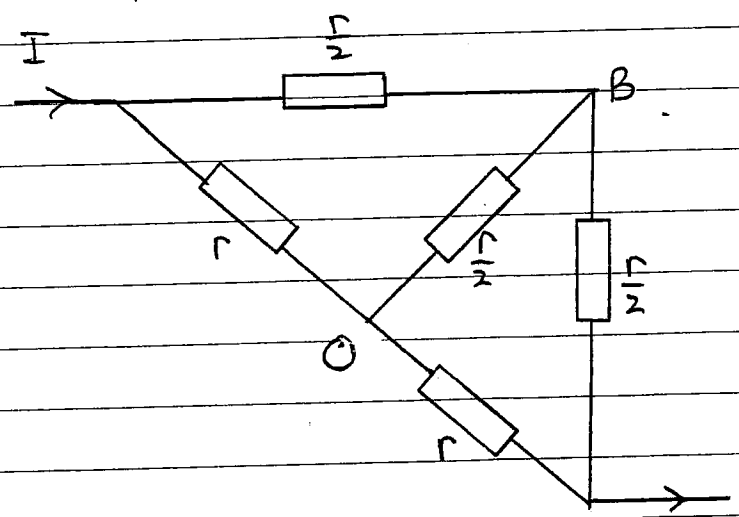
Solution 2

If only B and D are assumed to be at the same potential. Then

AD in parallel with AB; <sup>total</sup> resistance  $\frac{r}{2}$

DO in parallel with OB; total resistance  $\frac{r}{2}$

DC in parallel with BC; total resistance  $\frac{r}{2}$



This is a balanced Wheatstone bridge with no current through O. Total resistance  $(r+r)$  in parallel with  $(\frac{r}{2} + \frac{r}{2})$

$$R = \left(\frac{1}{2r} + \frac{1}{r}\right)^{-1} = \frac{2r}{3}$$

4